

# GRADE 2 – LESSON 19


## A. Complete and match.



S \_ \_ e n \_ e \_ n c \_ r \_ l \_ s



Twelve books



Th \_ \_ t e \_ n t r i \_ n \_ l \_ s

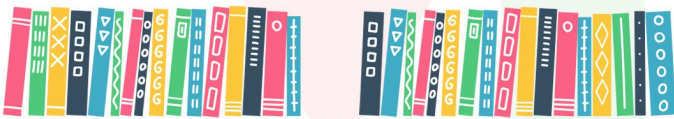


\_ i \_ t e \_ n \_ q \_ \_ r \_ s

## B. Read and circle.



1. How many books are there on the table? - Seventeen books.

2. How many circles are there in the room? - Sixteen circles.



3. How many triangles are there in the castles? - Fifteen triangles.

4. How many squares are there near the quilt? - Sixteen squares.



5. How many princes are there in the castle? - Six princes.



# GRADE 2 – LESSON 19

## C. Look, read and write.


1. How many triangles are there in the picture?

There are .....**sixteen**..... triangles.




2. How many ..... are there?

There are seventeen .....




3. How many ..... are there in the room?

There are eleven .....



4. How many birds are there in the garden?

There are ..... birds.




5. .... bees are there in the picture?

There are ..... bees.



# GRADE 2 – LESSON 19

## A. Complete and match.



Seventeen circles

Twelve books

Thirteen triangles


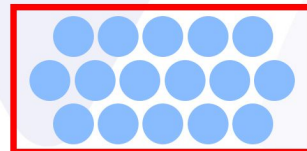
Sixteen squares

## B. Read and circle.



1. How many books are there on the table? - Seventeen books.



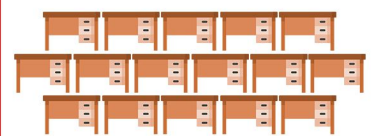

2. How many circles are there in the room? - Sixteen circles.




3. How many triangles are there in the castles? - Fifteen triangles.



4. How many squares are there near the quilt? - Sixteen squares.



5. How many princes are there in the castle? - Six princes.






# GRADE 2 – LESSON 19

## C. Look, read and write.


1. How many triangles are there in the picture?

There are .....**sixteen**..... triangles.




2. How many .....**circles**..... are there?

There are seventeen .....**circles.**.....




3. How many .....**squares**..... are there in the room?

There are eleven .....**squares.**.....



4. How many birds are there in the garden?

There are .....**twelve**..... birds.



5. ....**How many**..... bees are there in the picture?

There are .....**fifteen**..... bees.

